

Surface area

the sum of all the areas of the faces of a 3 dimensional figure

How to find surface area

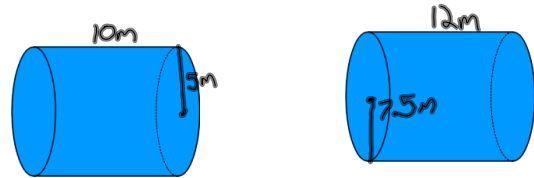
- find the area of each face of the figure
- add the areas

**\*\*Remember your squared labels!!!**

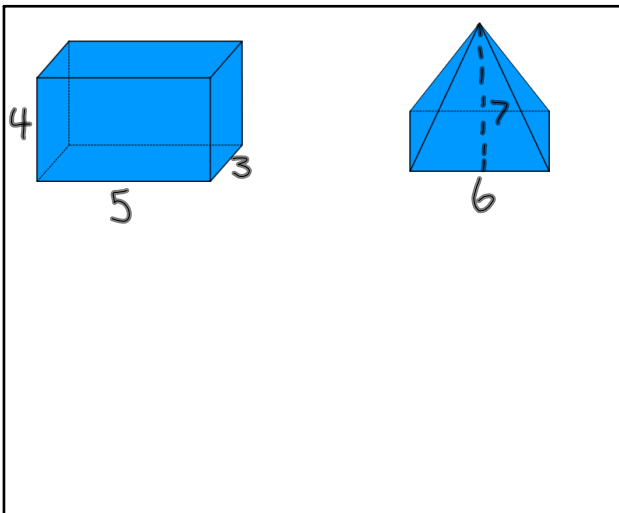
Feb 12-7:27 AM

How to find surface area of a cylinder

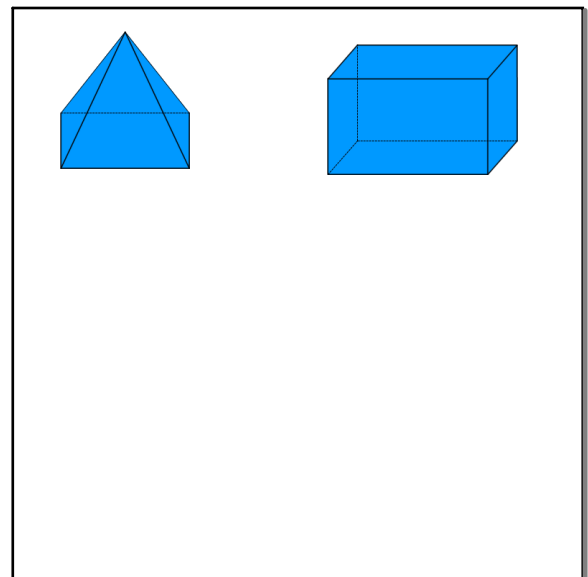
$$(2 \times 3.14 \times r \times r) + (2 \times 3.14 \times r \times h)$$



Feb 13-8:48 AM



Mar 15-7:52 AM



Mar 15-7:53 AM