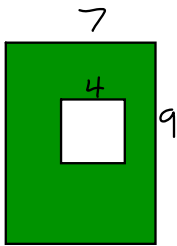


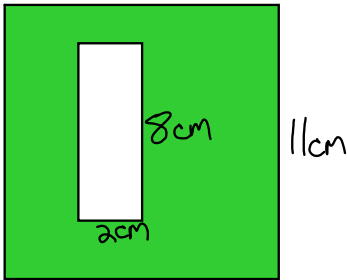
**How to find area of shaded figures**

- find the area of the whole thing (outside figure)
- find the area of the inside figure (non-shaded)
- subtract the areas

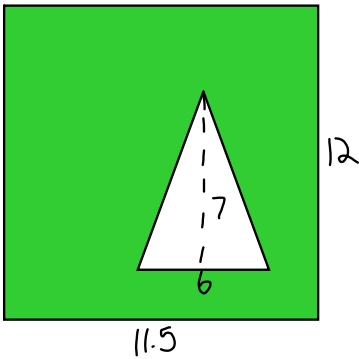


Mar 31-7:55 AM

**Find the area of the shaded region**



Mar 31-7:59 AM



Mar 31-8:02 AM